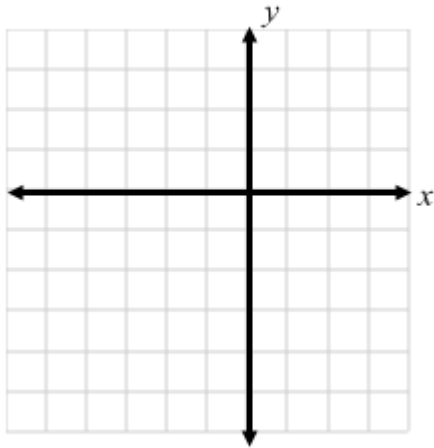


Name: _____ Date: _____ Per: _____

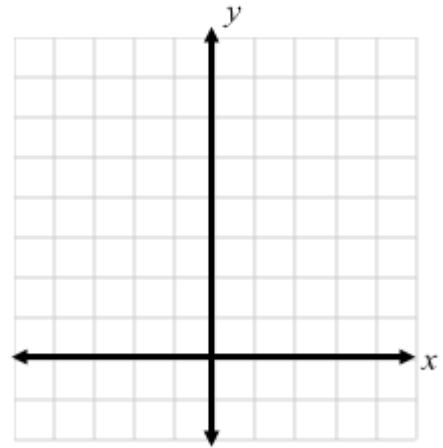
10.2: Graph Quadratics in the Form $y = ax^2 + bx + c$ Practice 5

Find the axis of symmetry and the vertex. Then graph the parabola by graphing points surrounding the vertex.

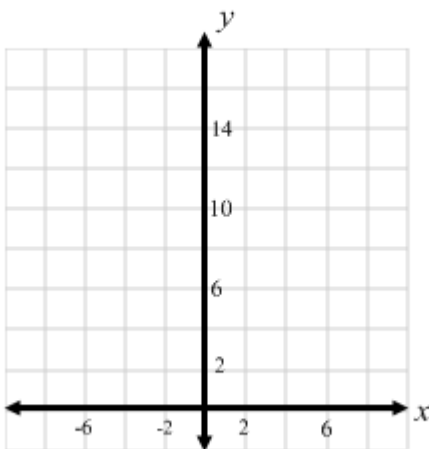
1. $y = -4x^2 + 4x + 3$



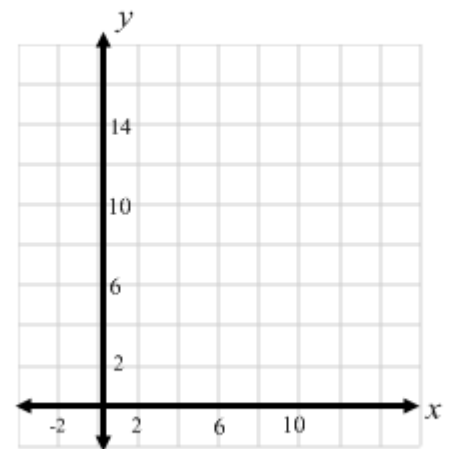
2. $y = 7x^2 - 14x + 6$



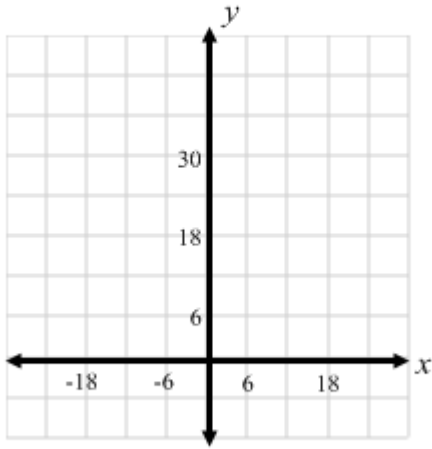
3. $y = 6x^2 - 12x + 13$



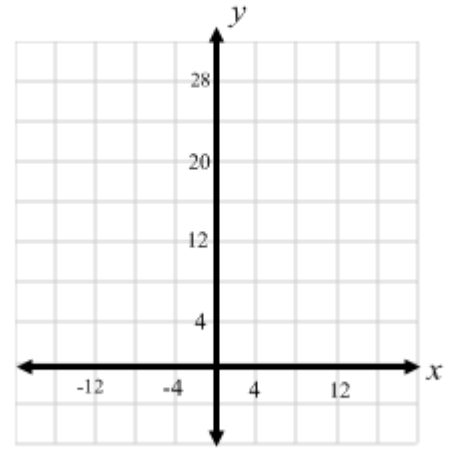
4. $y = \frac{1}{4}x^2 - 2x + 10$



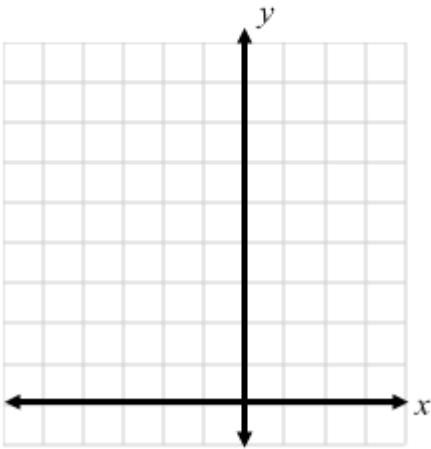
5. $y = -\frac{7}{2}x^2 + 21x - 5$



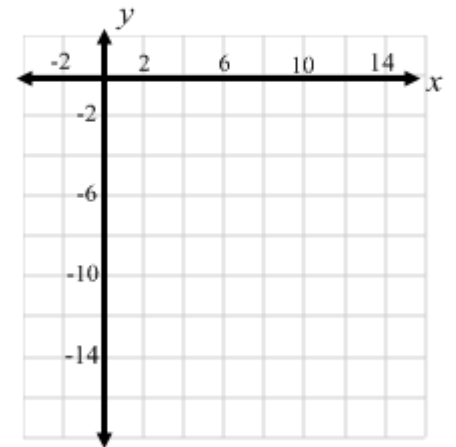
6. $y = -3x^2 + 18x - 4$



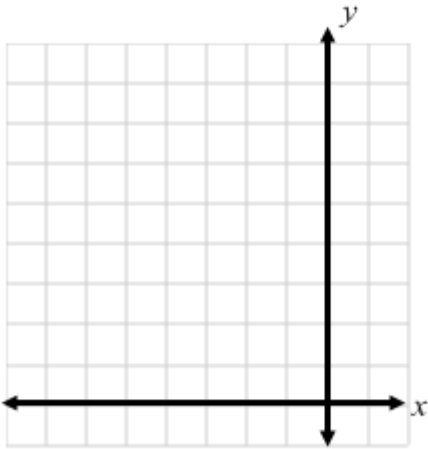
7. $y = x^2 + 2x + 5$



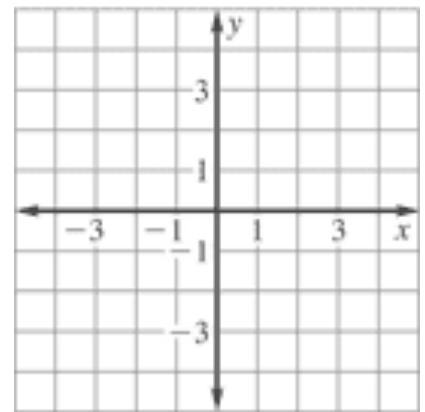
8. $y = x^2 - 8x + 1$



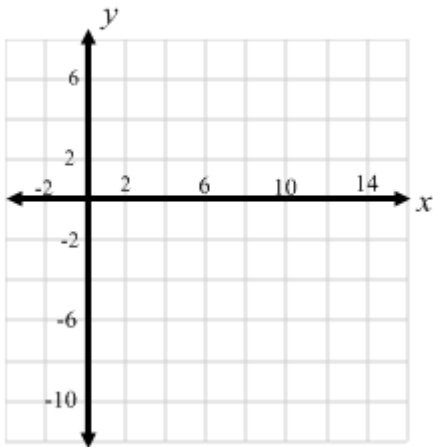
9. $y = -x^2 - 4x + 3$



10. $y = -2x^2 + 2x + 1$



11. $y = x^2 - 8x + 5$



12. $y = \frac{1}{4}x^2 + 3x - 1$

