

LESSON
4.6**Practice C**

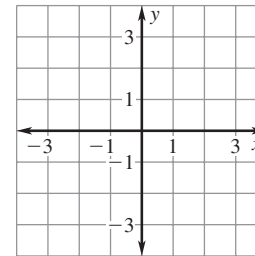
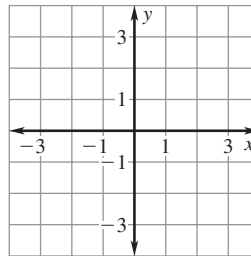
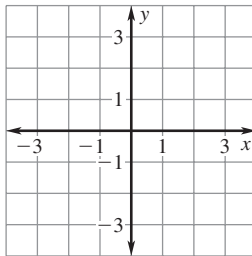
For use with pages 253–259

Tell whether the equation represents direct variation. If so, identify the constant of variation.

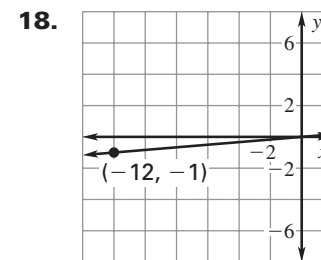
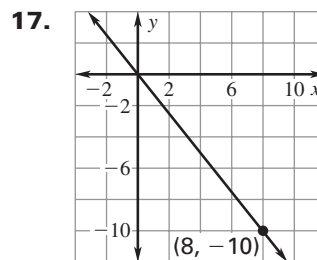
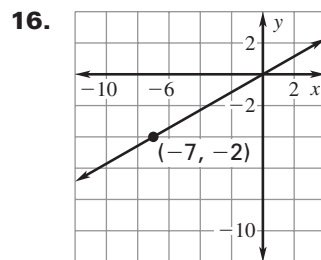
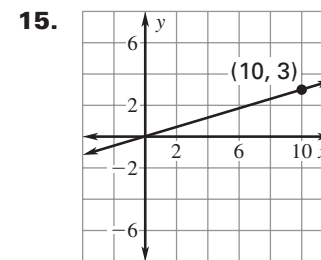
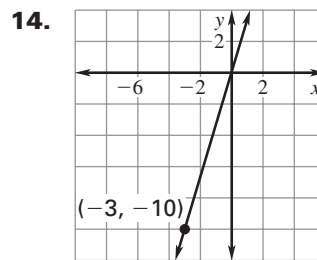
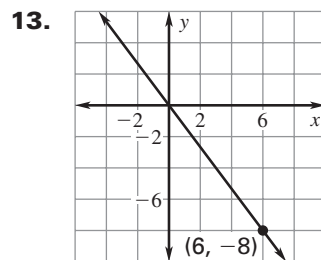
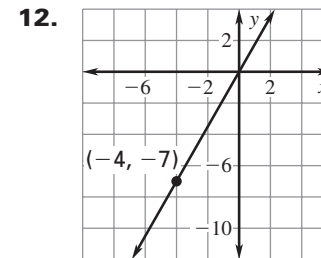
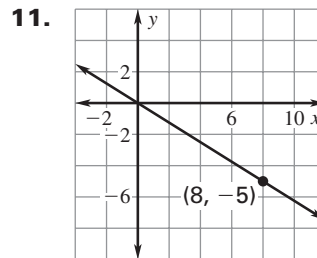
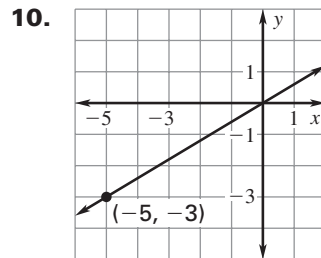
1. $y - 2x = 0$ 2. $3x + y = -2$ 3. $6.5x = 1.3y$
 4. $3y - 2x = 6x$ 5. $4x + 3y = 9$ 6. $xy + 4 = 0$

Graph the direct variation equation.

7. $4y = 5x$ 8. $-3x = 10y$ 9. $y - 2.25x = 0$



The graph of a direct variation equation is shown. Write the direct variation equation. Then find the value of y when $x = 10$.



LESSON
4.6
Practice C *continued*
 For use with pages 253–259

Tell whether the table represents direct variation. If so, write the direct variation equation.

19.

x	1	2	3	4	6
y	6	12	18	24	36

20.

x	-4	-2	2	4	6
y	14	7	-7	-14	-21

21.

x	8	-4	96	0.4	0.8
y	6	-12	0.5	120	40

22.

x	-32	80	-48	8	24
y	-2	5	-3	0.5	1.5

Given that y varies directly with x , use the specified values to write a direct variation equation that relates x and y .

23. $x = 13, y = 26$

24. $x = 45, y = -9$

25. $x = \frac{1}{5}, y = -1$

26. $x = \frac{3}{4}, y = 2$

27. $x = 1.5, y = -4.5$

28. $x = -3.6, y = -1.2$

29. $x = 27, y = -3$

30. $x = 10, y = 4$

31. $x = -2, y = -9$

32. $x = 8, y = -3$

33. $x = -10, y = -2$

34. $x = 32, y = -4$

35. The slope of a line is 5 and the point $(-4, 11)$ lies on the line. Use the formula for the slope of a line to determine if the equation of the line is a direct variation equation.

36. **Landscape Lighting** To use low-voltage lighting, you need a transformer to control the flow of electricity. The table shows the size s of the transformer (in watts) needed for the number n of 12-watt lights you want to use.

Transformer size, s (watts)	48	72	96
Number of lights, n	4	6	8

- Explain why s varies directly with n .
- Write a direct variation equation that relates s and n .
- How many 12-watt lights can you install using a 225-watt transformer?
- You want to install fifteen 12-watt lights. You have a choice of a 100-watt transformer or a 200-watt transformer. Which transformer should you get? Explain your reasoning.

37. **Retail Sales** The sales tax s (in dollars) on an item varies directly with the price p (in dollars) of an item. There is \$5.60 in sales tax on an item that costs \$80.

- Write a direct variation equation that relates s and p .
- The price p (in dollars) of an item varies directly with its sale price d (in dollars). The price of an item that costs \$80 is on sale for \$50. Write a direct variation equation that relates p and d .
- Show that the sales tax on an item varies directly with the sale price of the item.